

Şekil Sayı Eşleştirme

→
= 5

△
= 6

☆
= 2

□
= 7

▽
= 0

+

×

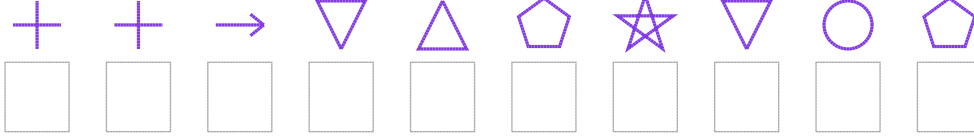
○
= 8

⬠
= 1

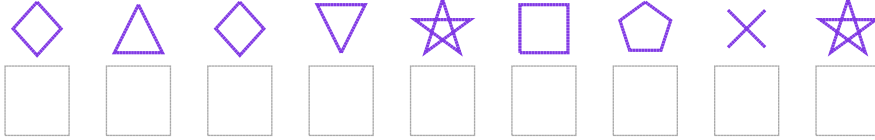
◇
= 9

Aşağıdaki uzun şifreleri hatasız çözerek altlarına yazın:

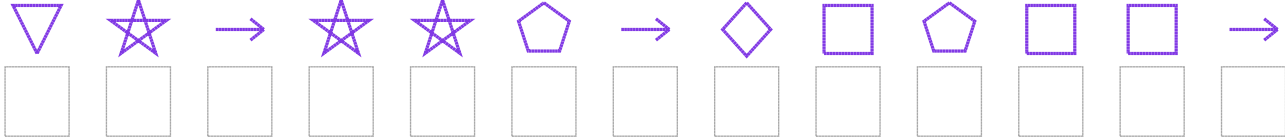
1. Şifre



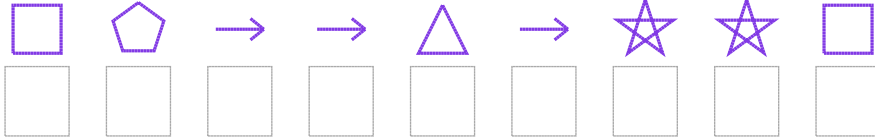
2. Şifre



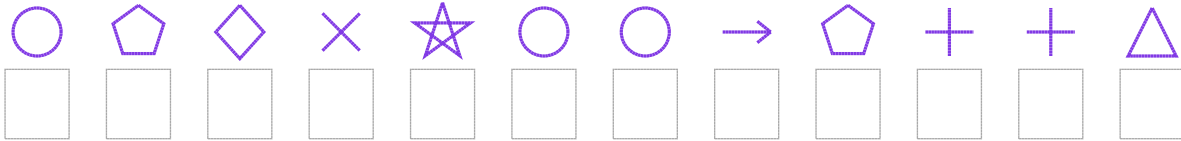
3. Şifre



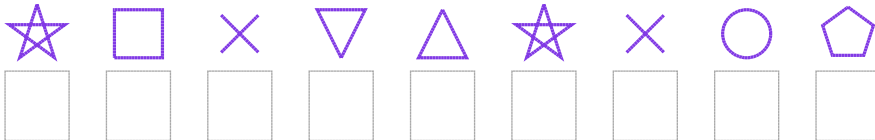
4. Şifre



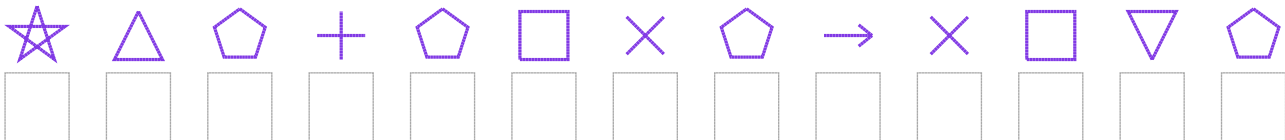
5. Şifre



6. Şifre



7. Şifre



□ BONUS: 5. ve 4. şifrenin üçüncü rakamının toplamı kaçtır?

Cevap Anahtarı

1. Şifre: 4450612081
2. Şifre: 969027132
3. Şifre: 0252215971775
4. Şifre: 715565227
5. Şifre: 819328851446
6. Şifre: 273062381
7. Şifre: 2614173153701

□ Bonus Soru Cevabı: 14